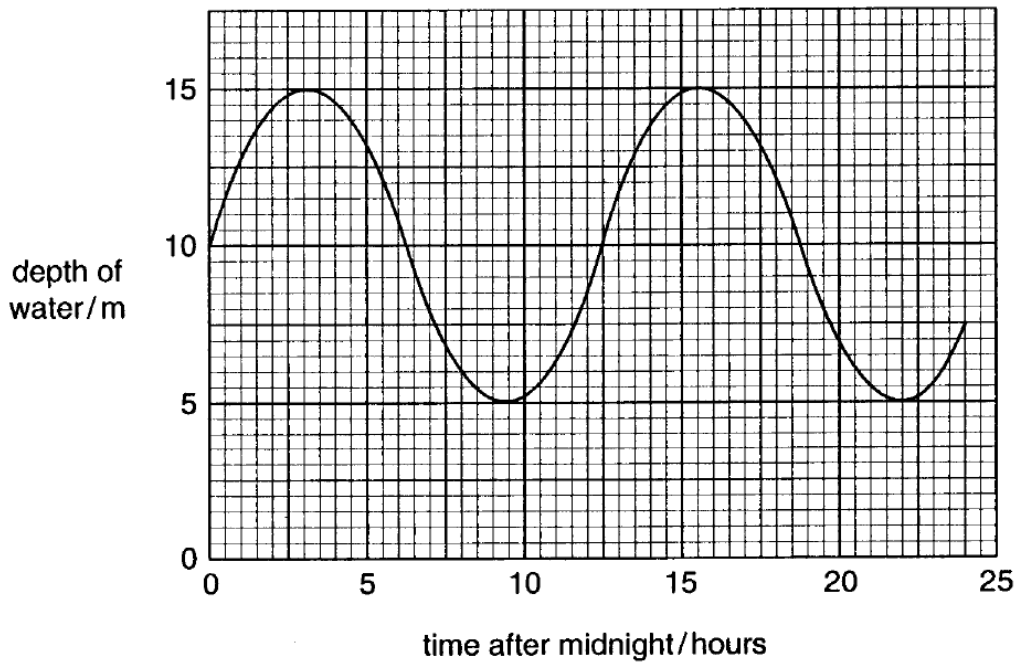


2863 Jan 04

7 The variation in depth of water in a harbour can be modelled as a simple harmonic oscillation.



**Fig. 7.1**

Fig. 7.1 shows a graph produced from the model. It shows the variation of depth of water in a harbour with time over the period of one day (24 hours).

**(a)** Use the graph to find

**(i)** the maximum depth of the water in the harbour

maximum depth = ..... m [1]

**(ii)** the amplitude  $A$  of the tidal motion

amplitude of motion = ..... m [1]

**(iii)** the rate of change of depth in metres per hour ( $\text{m hr}^{-1}$ ) at  $t = 6$  hours where  $t =$  time after midnight in hours. Show your working.

rate of change of depth = .....  $\text{m hr}^{-1}$  [3]

- (b) Use data from the graph to calculate the frequency  $f$  of the tidal motion in units of tides per hour.

frequency = ..... tides per hour [3]

- (c) A large boat needs at least 7 m of water to be able to enter the harbour. Use the graph to estimate the number of hours in the day (24 hours) that the boat could safely enter the harbour.  
Show your method clearly.

[2]

- (d) The equation for the depth of water  $d$ , in metres, in the harbour is

$$d = 10 + A \sin (2 \pi f t).$$

Use your answer to (a)(ii) and this equation to show that the lowest depth of water is 5 m.

[2]

[Total: 12]

**8** This question is about the vibrational testing of a satellite.

The vibrations simulate the shaking the satellite would undergo during launch. Assume the vibrations are simple harmonic.

**(a)** When a satellite of mass 10 000 kg oscillates at a frequency of 10 Hz, the amplitude of the oscillation is 35 mm.

**(i)** Explain what is meant by the term *amplitude*.

[2]

**(ii)** The maximum speed of the satellite during this oscillation is  $2.2 \text{ m s}^{-1}$ .

State the displacement of the satellite at which this maximum speed occurs.

displacement ..... mm [1]

**(iii)** State the acceleration of the satellite at the instant that maximum speed occurs.

acceleration .....  $\text{m s}^{-2}$  [1]

**(iv)** Calculate the **maximum** acceleration of a satellite due to this oscillation.

maximum acceleration .....  $\text{m s}^{-2}$  [2]

- (v) Show that the satellite will experience accelerating forces far greater than its weight.

$$g = 9.8 \text{ N kg}^{-1}$$

[2]

- (b) The communications aerial on the satellite is observed to shake violently at one particular frequency. This is an example of resonance.

- (i) Explain why the aerial behaves in this way.

[2]

- (ii) Suggest and explain how the aerial could be modified in order to reduce the problem of resonance.

[2]

[Total: 12]

11 This question is about some of the physics of the human ear.

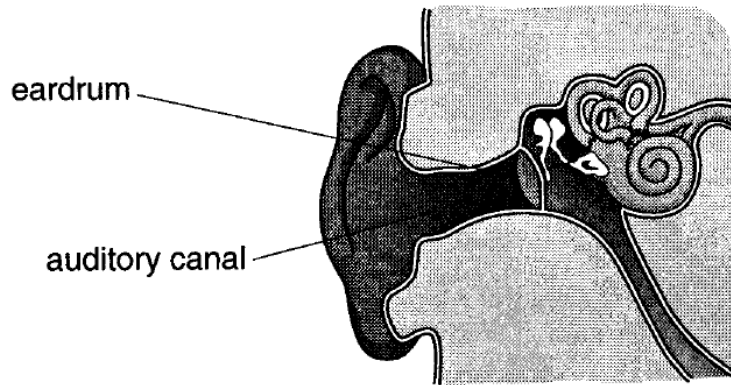


Fig. 11.1

A given sound wave striking the ear drum sets it oscillating in simple harmonic motion.

The ear drum oscillates at a frequency of 2500 Hz with an amplitude of  $1.0 \times 10^{-7}$  m.

(a) (i) Calculate the period of the oscillation.

period = .....s [1]

(ii) On the axes of Fig. 11.2, draw a graph to show how the displacement of the eardrum varies with time for **one** oscillation. Assume that the displacement is zero at  $t = 0$ .

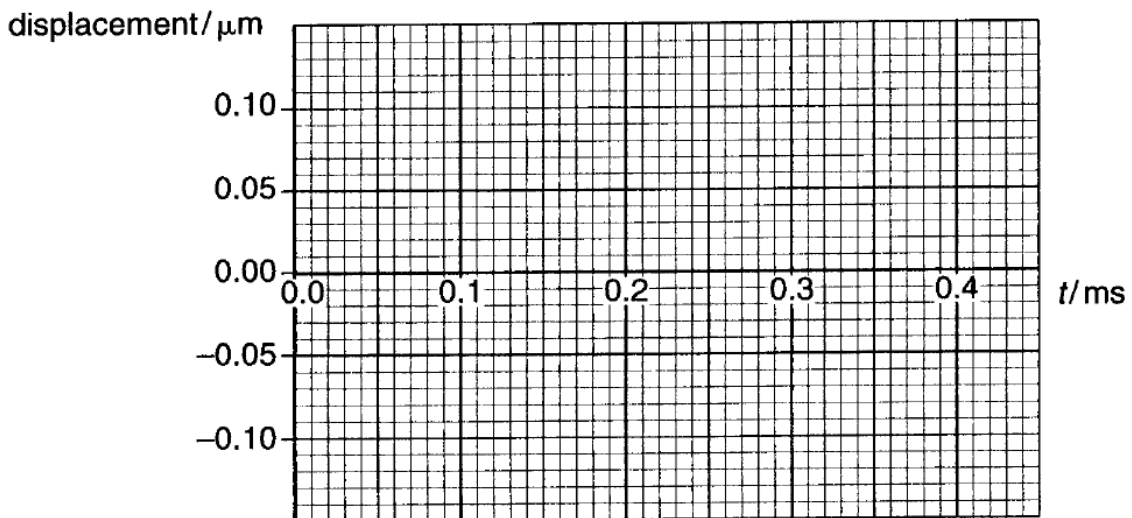


Fig. 11.2

[3]

(iii) Calculate the maximum acceleration of the ear drum.

acceleration = .....  $\text{m s}^{-2}$  [2]

(b) At a frequency of 3000 Hz, the ear can detect pressure changes as small as  $4.0 \times 10^{-5} \text{ N m}^{-2}$ .

Calculate the change of force such a pressure change would give on an ear drum of area  $20 \text{ mm}^2$ .

change of force = ..... N [2]

(c) The human ear is most sensitive to frequencies around 3000 Hz. This is because air in the auditory canal resonates at this frequency.

(i) Explain what is meant by *resonance*.

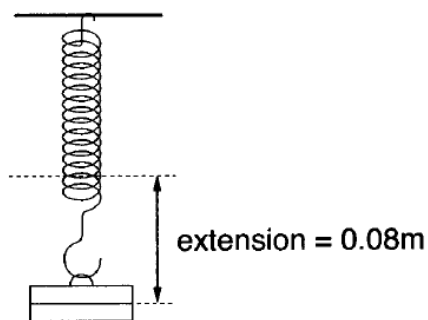
[1]

(ii) Describe how resonance allows the ear to respond to quieter sounds at around 3000 Hz than at other frequencies.

[2]

[Total: 11]

- 10** This question is about a mass oscillating on an elastic spring.  
The spring constant  $k$  for the spring is  $24 \text{ N m}^{-1}$ .



**Fig. 10.1**

- (a)** A mass of  $0.20 \text{ kg}$  is hung from the end of the spring and the system comes to rest.
- (i)** Show that the extension of the spring is about  $0.08 \text{ m}$ .

$$g = 9.8 \text{ N kg}^{-1}$$

[1]

- (ii)** Calculate the elastic strain energy stored in the spring.

$$\text{elastic strain energy} = \dots\dots\dots\text{J [2]}$$

- (iii)** Calculate the change in gravitational potential energy of the mass as it extends the spring by  $0.08 \text{ m}$ .

$$\text{change in gravitational potential energy} = \dots\dots\dots\text{J [2]}$$

- (iv)** Explain why the energy stored in the spring is less than the change in gravitational potential energy.

[1]

- (b) The spring is extended by a further 0.060 m and then released. The mass oscillates up and down.  
The motion of the mass is recorded using a data logger. A short section of the trace is shown in Fig. 10.2.

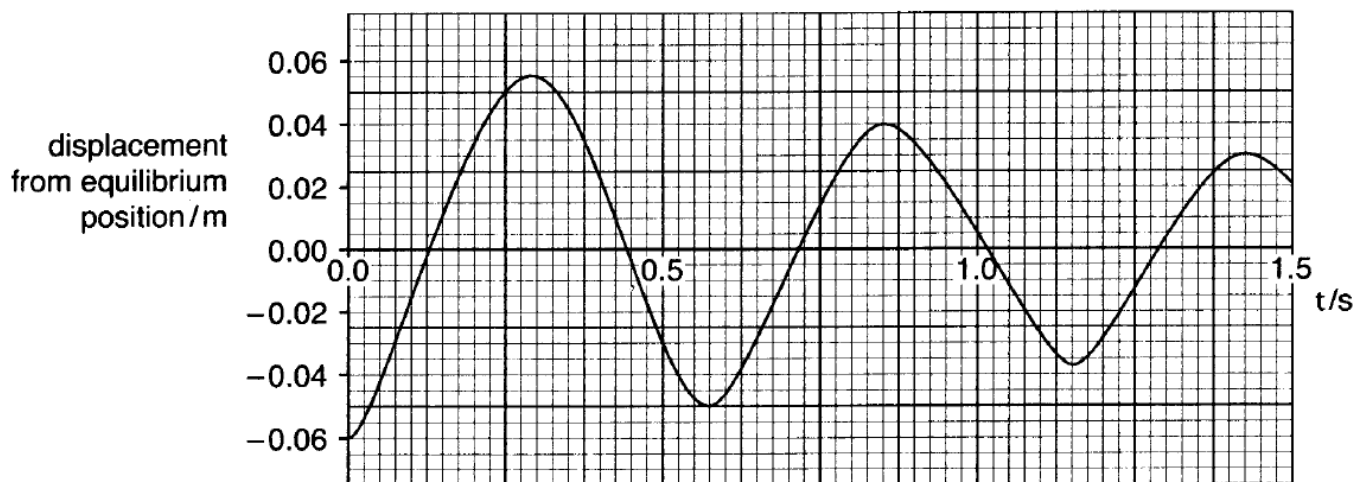


Fig. 10.2

- (i) State how the graph shows that the velocity of the oscillating mass is zero when it is at maximum displacement. [1]
- (ii) Mark a point on the graph where the resultant force on the oscillating mass is zero. Label this point X. [1]
- (c) The time trace of the oscillator over a large number of oscillations is shown in Fig. 10.3.

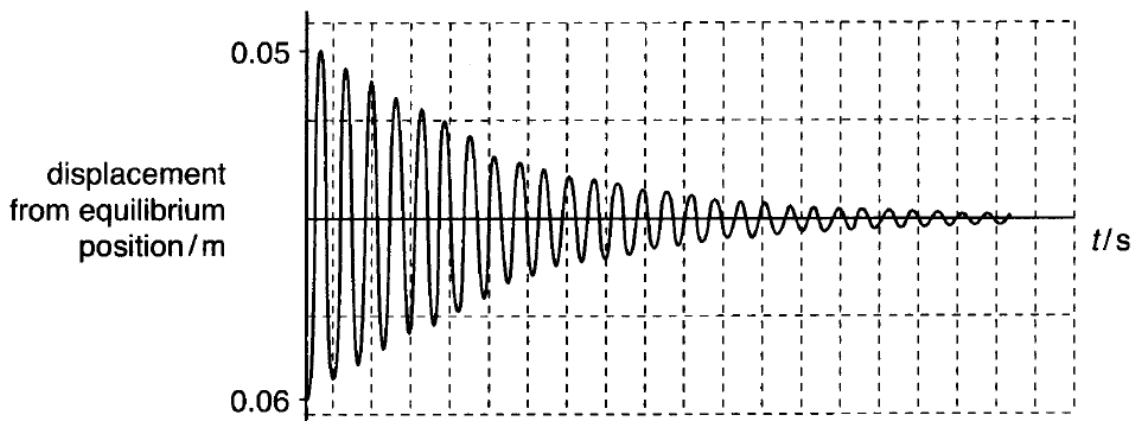


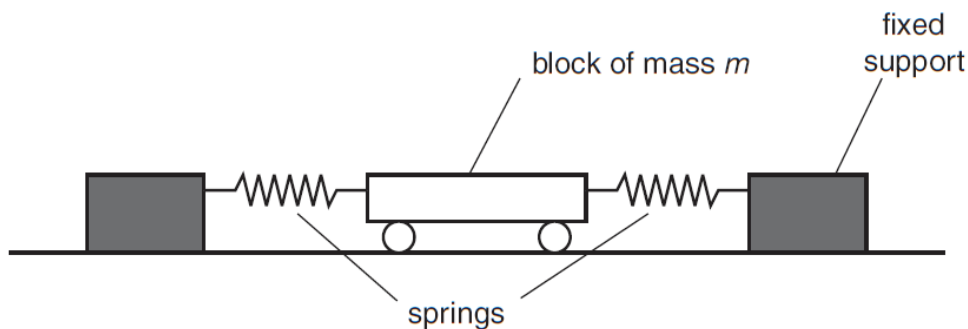
Fig. 10.3

Explain how the graph shows that the amplitude of the oscillation falls exponentially over time.

[2]  
[Total: 10]



9 This question is about the oscillation of a mass between a pair of springs as shown in Fig. 9.1.



**Fig. 9.1**

(a) The system obeys Hooke's Law with a stiffness constant  $k$ .

The block is displaced a horizontal distance  $x$  and released.

(i) Show that the initial acceleration  $a$  of the mass  $m$  is given by

$$a = -\frac{kx}{m}.$$

[2]

(ii) Explain why the equation in (i) shows that the body will undergo simple harmonic motion.

[2]

(iii) The acceleration of the mass is also given by the equation

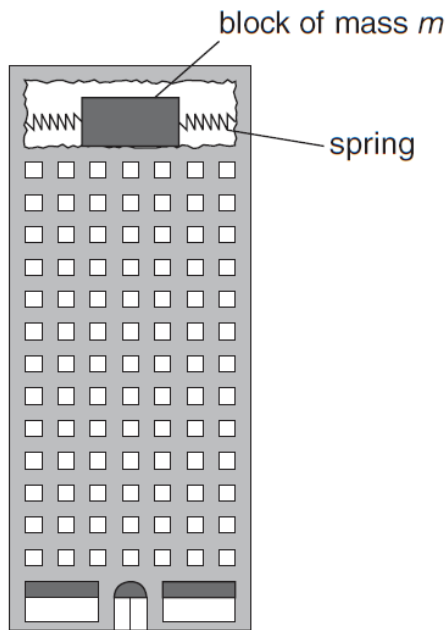
$$a = -4\pi^2 f^2 x.$$

Use this equation and the equation from (i) to show that

$$f = \frac{1}{2\pi} \sqrt{\frac{k}{m}}.$$

[1]

- (b) Such a system is used as a **damper** to reduce the movement of tall buildings in earthquakes or high winds as shown in Fig. 9.2.



**Fig. 9.2** not to scale

Here are some data for this damper system.

mass of block = 290 000 kg  
stiffness constant of the system =  $2.8 \times 10^6 \text{ N m}^{-1}$

The system is designed to reduce the oscillations of a building which has a natural frequency of 0.5 Hz.

- (i) Show that the frequency of the mass oscillating between springs matches the natural frequency of the building.

[2]

- (ii) A sudden movement of the building displaces the block 0.7 m from its equilibrium position relative to the building.

Show that the energy transferred to the oscillator is about 700 kJ.

[1]

(c) The oscillator is damped. It loses 50% of its **energy** on each oscillation.

(i) Show that the **amplitude** of the oscillator is reduced from 0.7m to 0.5m after one complete oscillation.

[2]

(ii) Calculate the number of oscillations it takes for the amplitude to fall to one eighth of its original value.

number of oscillations = ..... [2]

(d) Suggest why dampers are more effective when placed near the top of the buildings.

[1]

[Total: 13]

June 2007

10 This question is about investigating the physics of bungee jumping.

A student models a bungee jump by hanging a tennis ball of mass 0.12 kg from a single strand of elastic thread with unstretched length of 0.95 m as shown in Fig. 10.1.



Fig. 10.1

(a) (i) Show that the weight of the ball is about 1.2 N.

$$g = 9.8 \text{ N kg}^{-1}$$

[1]

(ii) The elastic thread has a stiffness constant of  $3.1 \text{ N m}^{-1}$ . Show that the elastic thread will stretch to a length of about 1.3 m when the ball is hanging from the end.

[2]

(iii) Explain why the resultant force on the tennis ball is zero when the thread is at this length.

[1]

- (b) The ball is dropped from a position level with the top of the elastic thread as shown in Fig. 10.2.



Fig. 10.2

Fig. 10.3 shows the graph of the resultant force on the ball as the distance fallen increases.

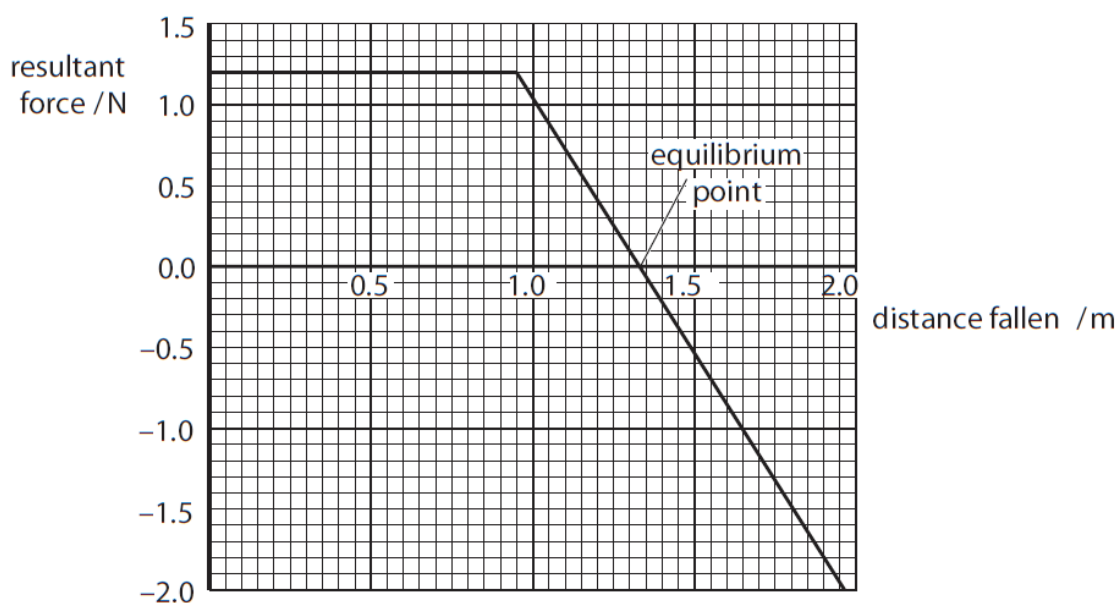


Fig. 10.3

Using the graph or by calculation show that

- (i) the kinetic energy of the ball when it has fallen 0.95 m is about 1 J.

[1]

Question 10 is continued over the page.

- (ii) the kinetic energy of the ball when it has fallen to the point of zero resultant force (equilibrium point) is about 1.3 J.

[2]

- (c) The ball oscillates vertically. The amplitude decreases and after a number of oscillations the ball comes to rest at the equilibrium point.

- (i) Explain how the graph shows that the motion could be described as simple harmonic for amplitudes less than about 0.4 m but cannot be simple harmonic for greater amplitudes.

[4]

- (ii) Calculate the frequency of the small amplitude oscillations.

frequency = ..... Hz [2]

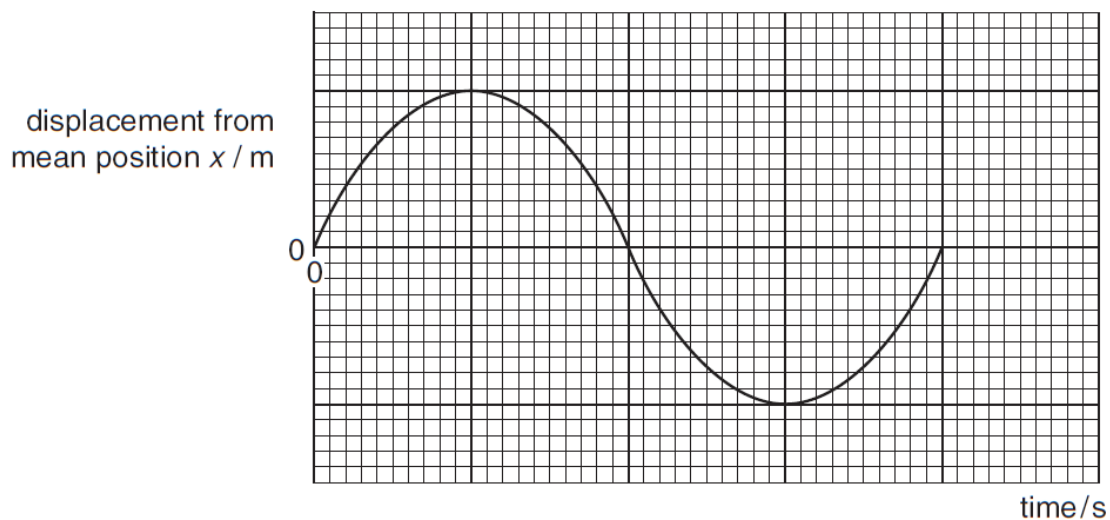
[Total: 13]

**10** This question is about the motion of a piston in a car engine.

Here are some data about the motion of the piston.

frequency  $f = 50 \text{ Hz}$   
 amplitude  $A = 0.050 \text{ m}$

The motion of the piston is represented in Fig. 10.1 where  $x$  is the displacement at time  $t$  of the piston from the mean position.



**Fig. 10.1**

**(a)** Complete the graph by adding numerical values to the axes.

[2]

**(b)** The equation of motion of the piston represented in Fig. 10.1 is

$$x = A \sin (2\pi f t)$$

where  $t$  is the time elapsed since the beginning of the motion.

Calculate the displacement of the piston at  $t = 0.013 \text{ s}$ .

displacement = ..... m [2]

(c) The velocity of the piston  $v$  is given by the equation  $v = 2 \pi f A(\cos 2\pi ft)$ .

(i) Explain how the equation shows that the maximum velocity of the piston is given by

$$\text{maximum velocity} = 2 \pi f A.$$

[1]

(ii) Calculate the maximum velocity of the piston.

$$\text{maximum velocity} = \dots\dots\dots \text{m s}^{-1} \quad [1]$$

(iii) State the feature of the graph in Fig. 10.1 that could be used to obtain a value for the maximum velocity of the piston.

[1]

(d) (i) Mark on Fig. 10.1 a point at which the acceleration of the piston is at a maximum. Label this point **X**. [1]

(ii) Calculate the maximum acceleration of the piston.

$$\text{acceleration} = \dots\dots\dots \text{m s}^{-2} \quad [2]$$

[Total: 10]